

What Did the Scout Say After Fixing the Little Old Lady's Bicycle Horn?



For each exercise, draw a line through the two given points. Find the slope of this line. Write the letter of the exercise in the box containing the slope.

A (1, 1)
(4, 3)

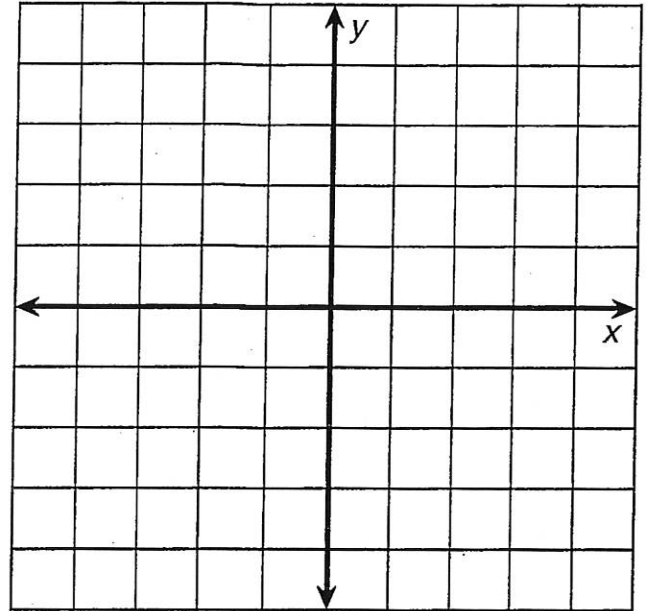
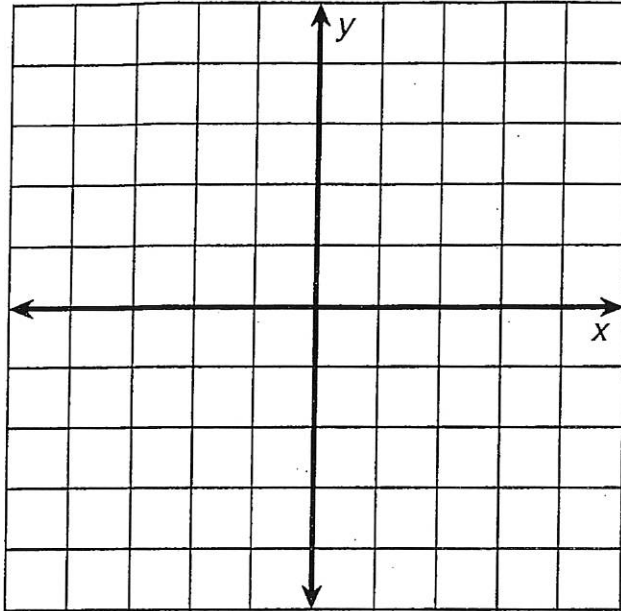
E (-1, 2)
(-4, 4)

D (-2, -5)
(2, -3)

I (-4, -3)
(-1, 3)

E (1, 0)
(3, -4)

P (2, 4)
(0, -3)



E (4, -5)
(-1, -2)

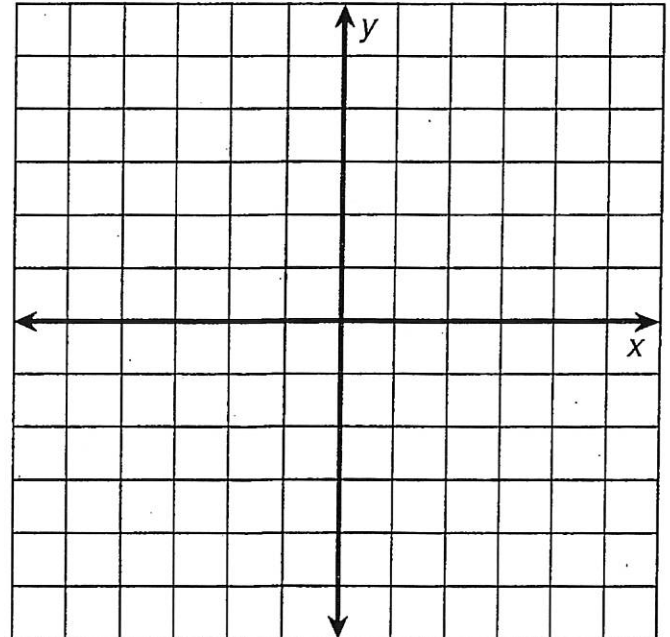
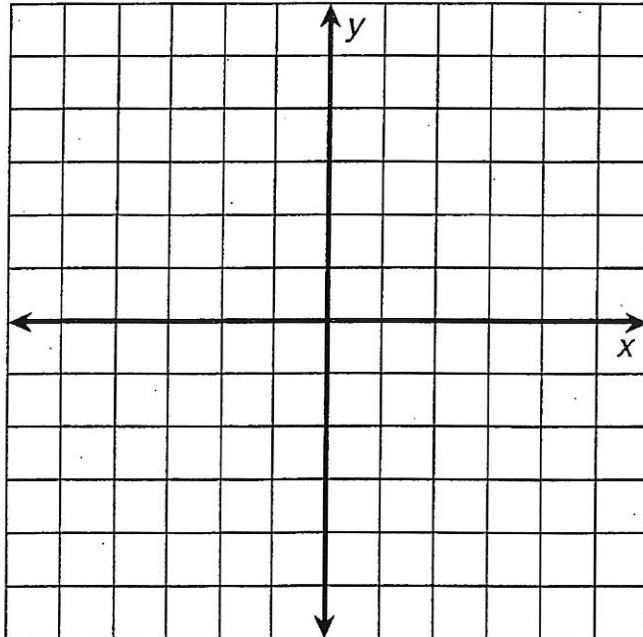
B (-6, -6)
(3, 6)

R (0, 2)
(5, -3)

E (-6, 4)
(-3, -5)

P (-3, 0)
(3, 1)

R (-2, -4)
(5, -4)



- | | | | | | | | | | | | | | | |
|---------------|---------------|----|----------------|---------------|----------------|----|----|---------------|---------------|---|---|----------------|---------------|----------------|
| $\frac{2}{5}$ | $\frac{4}{3}$ | -3 | $-\frac{2}{3}$ | $\frac{7}{2}$ | $-\frac{5}{2}$ | -1 | -2 | $\frac{1}{6}$ | $\frac{2}{3}$ | 2 | 0 | $-\frac{3}{5}$ | $\frac{1}{2}$ | $-\frac{1}{4}$ |
|---------------|---------------|----|----------------|---------------|----------------|----|----|---------------|---------------|---|---|----------------|---------------|----------------|

