


What Happened to the Pelican Who Stuck His Head Into a Wall Socket?



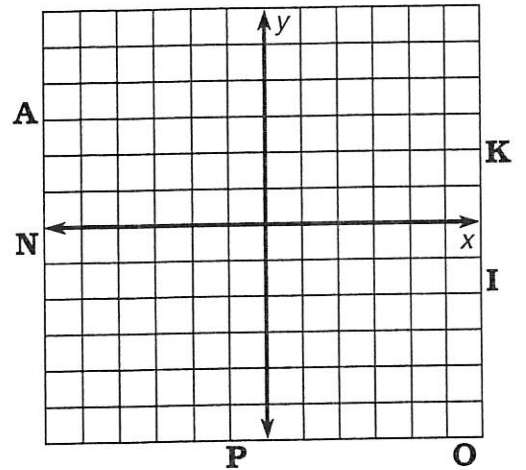
Graph each equation on the grid to its right. The graph will cross a letter outside the grid. Write this letter in each box containing the exercise number.

1 $-2x + 5y = 10$

2 $2x - 5y = 20$

3 $4x + 3y = 3$

4 $-8x - 6y = 30$

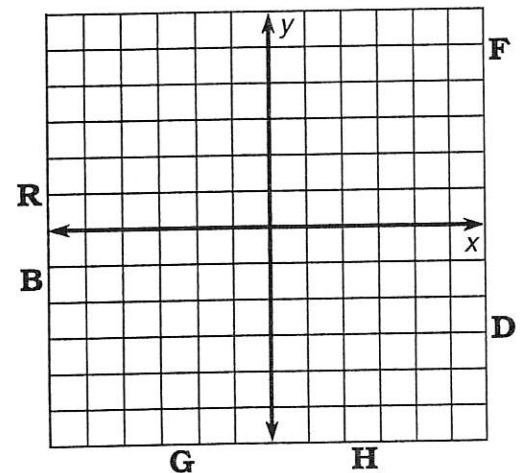


5 $x - 6y = -12$

6 $15x + 5y = 10$

7 $8x + 20y = -80$

8 $9x - 9y = 36$

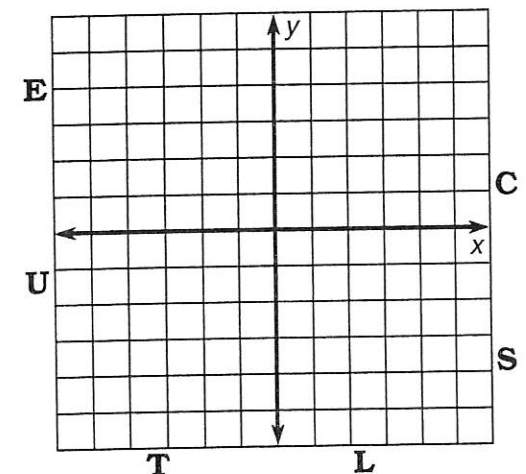


9 $2x - 3y - 9 = 0$

10 $3x + 2y + 6 = 0$

11 $2x - y = 0$

12 $y = 4$



6	12	8	3	11	4	1	12	10	12	9	11	5	2	9	7	2	10	10
---	----	---	---	----	---	---	----	----	----	---	----	---	---	---	---	---	----	----

*It was revolting!