

Draw a triangle with the given description. Label the given parts!

1.) 25° , 65° , 90°


2.) 45° , 60° , 75°

3.) an obtuse scalene triangle

4.) a triangle with a 110° angle connected to a 25° angle by a 1-inch side.

5.) a right angle with two adjacent congruent sides

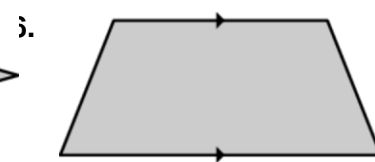
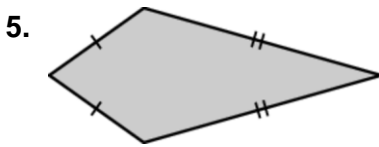
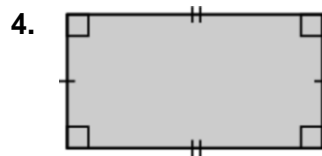
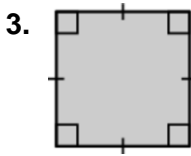
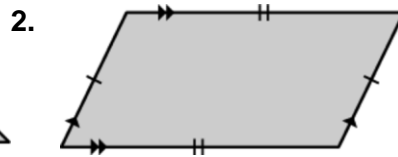
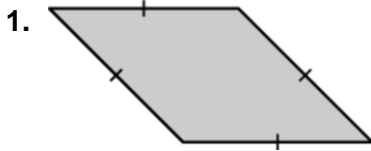
6.) a scalene triangle with a 2 cm side and a 3 cm side that meet at a 50° angle.



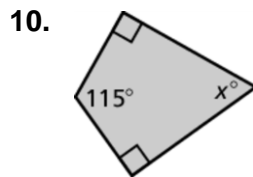
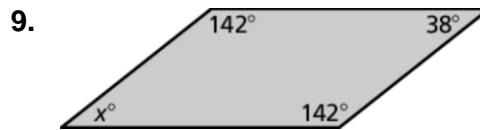
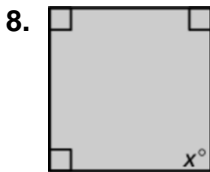

What's The Healthiest Insect?

Write the letter of each answer in the box containing the exercise number.

Classify the quadrilateral.



Find the value of x .



Answers	
N.	rectangle
A.	kite
E.	rhombus
M.	trapezoid
I.	square
T.	parallelogram
E.	90
B.	65
V.	38
I.	55

9	7	2	5	6	3	4		10	1	8
---	---	---	---	---	---	---	--	----	---	---